

MIDTERM EXAMINATION #1

September 29, 2003
Time allotted: 50 minutes

NAME: SOLUTIONS Last First

Signature: _____ STUDENT ID#: _____

Discussion Section: _____

1. This is a CLOSED BOOK exam. However, you may use 1 page of notes and a calculator.
2. SHOW YOUR WORK on this exam. (Make your methods clear to the grader.)
3. Write your answers clearly in the spaces (lines, boxes, or plots) provided.
4. Remember to specify the units on answers whenever appropriate.

SCORE: 1 _____ / 15

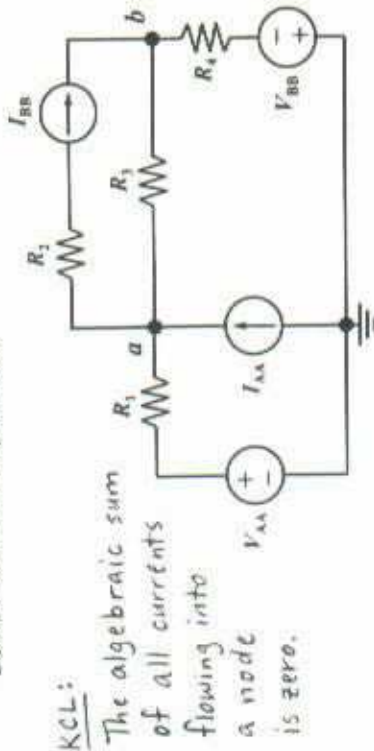
2 _____ / 21

3 _____ / 14

Total: _____ / 50

Problem 1: Circuit Analysis (15 points in total)

- a) In the circuit below, the independent source values and resistances are known. Use the node-voltage method to write 2 equations sufficient to solve for V_a and V_b . To receive credit, you must write your answer in the box below. [5 pts]
DO NOT SOLVE THE EQUATIONS!



KCL:

The algebraic sum of all currents flowing into a node is zero.

Applying KCL to node a:

$$\frac{V_{AA} - V_a}{R_1} + I_{AA} - I_{BB} + \frac{V_b - V_a}{R_3} = 0$$

Applying KCL to node b:

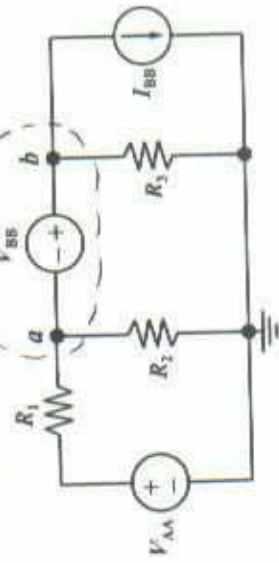
$$\frac{V_a - V_b}{R_3} + I_{BB} + \frac{-V_{BB} - V_b}{R_4} = 0$$

Write your equations here:

$$\frac{V_{AA} - V_a}{R_1} + I_{AA} - I_{BB} + \frac{V_b - V_a}{R_3} = 0$$

$$\frac{V_a - V_b}{R_3} + I_{BB} - \frac{V_{BB} + V_b}{R_4} = 0$$

- b) In the circuit below, the independent source values and resistances are known. Use the node-voltage method to write 2 equations sufficient to solve for V_a and V_b . To receive credit, you must write your answer in the box below. [5 pts]
DO NOT SOLVE THE EQUATIONS!



Applying KCL to supernode:

$$\frac{V_{AA} - V_a}{R_1} + \frac{0 - V_a}{R_2} + \frac{0 - V_b}{R_3} - I_{BB} = 0$$

Constraint imposed by floating voltage source:

$$V_b - V_a = V_{BB}$$

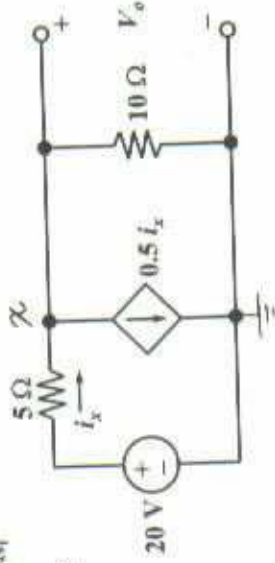
Write your equations here

$$\frac{V_{AA} - V_a}{R_1} - \frac{V_a}{R_2} - \frac{V_b}{R_3} - I_{BB} = 0$$

$$V_b - V_a = V_{BB}$$

- e) Find V_o . [5 pts]

$$i_x = \frac{20 - V_o}{5}$$



Applying KCL to node x:

$$i_x - 0.5 i_x - \frac{V_o - 0}{10} = 0$$

$$0.5 i_x - \frac{V_o}{10} = 0$$

$$i_x - \frac{V_o}{5} = 0$$

$$\frac{20 - V_o}{5} - \frac{V_o}{5} = 0$$

$$20 - V_o - V_o = 0$$

$$20 = 2V_o$$

$$10 = V_o$$

$$V_o = 10 \text{ Volts}$$

Problem 2: Equivalent Circuits (21 points in total)

a) Suppose you are given five resistors, each of value $10\text{ k}\Omega$. What is the **maximum resistance** which can be achieved by connecting these five resistors? Show how they should be connected in this case. (3 pts)

Connect the resistors in series, in order to achieve the largest equivalent resistance. $R_{eq} = \sum_{i=1}^5 R_i = 50\text{ k}\Omega$

Circuit diagram of resistors connected to give a maximum resistance value of $50\text{ k}\Omega$



b) What is the **minimum resistance** which can be achieved by connecting these five resistors? Show how they should be connected in this case. (3 pts)

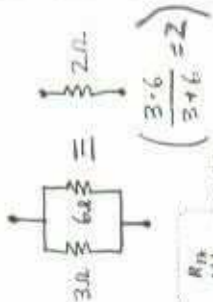
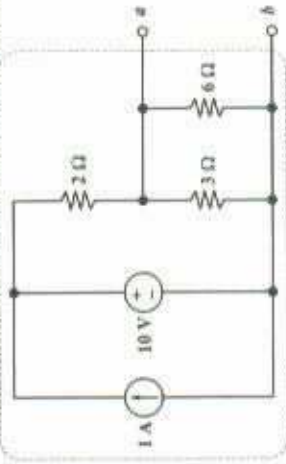
Connect the resistors in parallel, in order to achieve the smallest equivalent resistance.

$$\frac{1}{R_{eq}} = \sum_{i=1}^5 \frac{1}{R_i} = 5 \left(\frac{1}{10\text{ k}\Omega} \right) = \frac{1}{2\text{ k}\Omega}$$

Circuit diagram of resistors connected to give a minimum resistance value of $2\text{ k}\Omega$



b) Find the Thevenin equivalent circuit for the circuit below. (6 pts)



V_{Th} is just the open-circuit voltage V_{oc} :



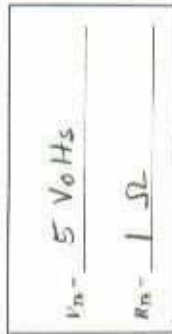
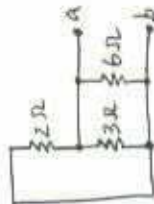
Using the voltage divider

$$\text{formula: } V_{oc} = \frac{2\Omega}{2\Omega + 2\Omega} (10V)$$

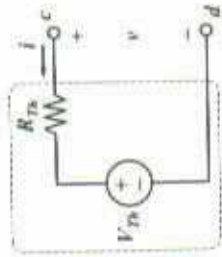
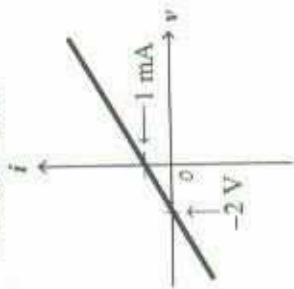
$$V_{oc} = 5V$$

To find R_{Th} , set all the independent sources to zero:

- Current source \rightarrow open circuit
- Voltage source \rightarrow short circuit

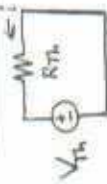


ii) The I-V characteristic of a linear circuit is given below. Find the Thévenin equivalent of this circuit. [3 pts]



When $i = 0$, $v = V_{Th}$: From the I-V plot, $v = -2V$ when $i = 0$.
Therefore, $V_{Th} = -2V$

When $v = 0$, $i = -\frac{V_{Th}}{R_{Th}}$



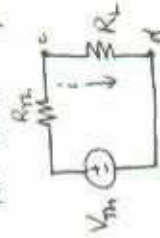
From the I-V plot,
 $i = 1 \text{ mA}$ when $v = 0$.
 $1 \text{ mA} = -\frac{(-2V)}{R_{Th}}$

$$V_{Th} = -2 \text{ Volts}$$

$$R_{Th} = 2 \text{ k}\Omega$$

iii) Suppose the circuit in part (e) is loaded with a resistor of resistance R_L (connected between terminals c and d). What is the maximum power that can be delivered to this load resistor? [3 pts] (Hint: You should choose the value of R_L which results in the maximum power absorbed by the load resistor, and then calculate that power.)

From the maximum power transfer theorem, $R_L = R_{Th}$ for maximum power to be absorbed by R_L .

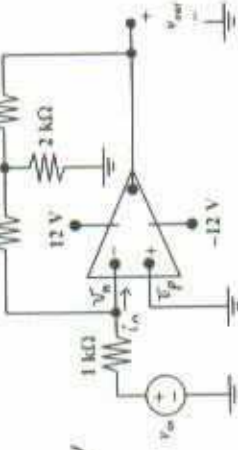


Power delivered to load resistor

$$P = i^2 R_L = \left(\frac{V_{Th}}{R_{Th} + R_L} \right)^2 R_L = \frac{(-2)^2}{4(2k\Omega)} = \frac{1}{2} \text{ mW}$$

$$P_{max} = 0.5 \text{ mW}$$

Problem 3: Op Amp Circuit [14 points in total]
Consider the op amp circuit below.



ideal op amp:

$$v_n = v_p = 0 \text{ V}$$

$$i_n = 0 \text{ A}$$

$$i_p = 0 \text{ A}$$

a) Assuming the op amp is operating in its linear region, find an expression for v_{out} as a function of v_{in} . [10 pts]

Applying KCL to inverting input node:

$$\frac{v_{in} - 0}{1k\Omega} + \frac{v_x - 0}{2k\Omega} = 0$$

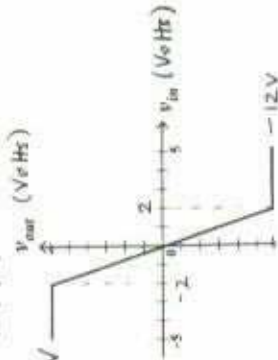
$$\Rightarrow v_x = -2v_{in}$$

Applying KCL to node x:

$$\frac{0 - v_x}{2k\Omega} + \frac{0 - v_x}{2k\Omega} + \frac{v_{out} - v_x}{2k\Omega} = 0 \Rightarrow v_{out} = 3v_x = 3(-2v_{in})$$

$$v_{out} = -6v_{in}$$

b) Sketch the voltage transfer characteristic for the op-amp circuit, for v_{in} ranging from -5 Volts to $+5$ Volts. Indicate the minimum and maximum values of v_{out} . [4 pts]



Due to the positive and negative power supply voltages, $-12V \leq v_{out} \leq 12V$