

Problem #1 (16 points)

Classify the following systems. In each column, write "yes", "no" or "?" (Use "?" if the system can not be classified with the given information). The input of the system is $x(t)$ and the output is $y(t)$. (+1 for correct answer, 0 for blank, -1 for incorrect; 0 minimum score.)

| System | Causal | Linear | Time Invariant | BIBO Stable |
|--|--------|--------|----------------|-------------|
| a. $y(t) = x(t) $ | | | | |
| b. $y(t) = x(t) + 1$ | | | | |
| c. $y(t) = dx(t)/dt$ | | | | |
| d. $y(t) = \int_{-\infty}^{\infty} x(L)x(t-L)dL$ | | | | |

Problem #2 (24 points)

Consider a system whose behavior is specified by the differential equation:

$$dy(t)/dt + y(t) = x(t)$$

with input $x(t)$ and output $y(t)$.

If $x(t) = \cos(t)$, find $y(t)$. Express $y(t)$ as a real function.

Problem #3 (36 points)

Answer each part independently, using the sketches on the next page, or state NONE.

The sketches on the next page can be used as either spectra or time plots.

The vertical scale, horizontal scale, and origin in each of the answer sketches are arbitrary, and independent.

Hint: $\sin(\pi t)/(\pi t) \leftrightarrow \text{rect}(w/(2\pi))$

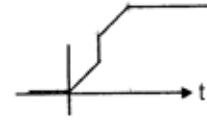
a) $y(t) = \sin(\pi t)/(\pi t) * \sum(\delta(t-n))$, $y(t)$ is sketch:

b) $y(t) = \sin(3\pi t)/(\pi t) * \sum(\delta(t-n))$, $y(t)$ is sketch:

c) $y(t) = \sin(\pi t)/(\pi t) * \sum(\delta(t-n))$, $Y(w)$ is sketch:

d) $y(t) = \sin(\pi t)/(\pi t) * \sum(\delta(t-n/2))$, $Y(w)$ is sketch:

e) $y(t) = [\cos(\pi t) * \cos(3\pi t)] * \sin(3\pi t)/(\pi t)$, $y(t)$ is sketch:



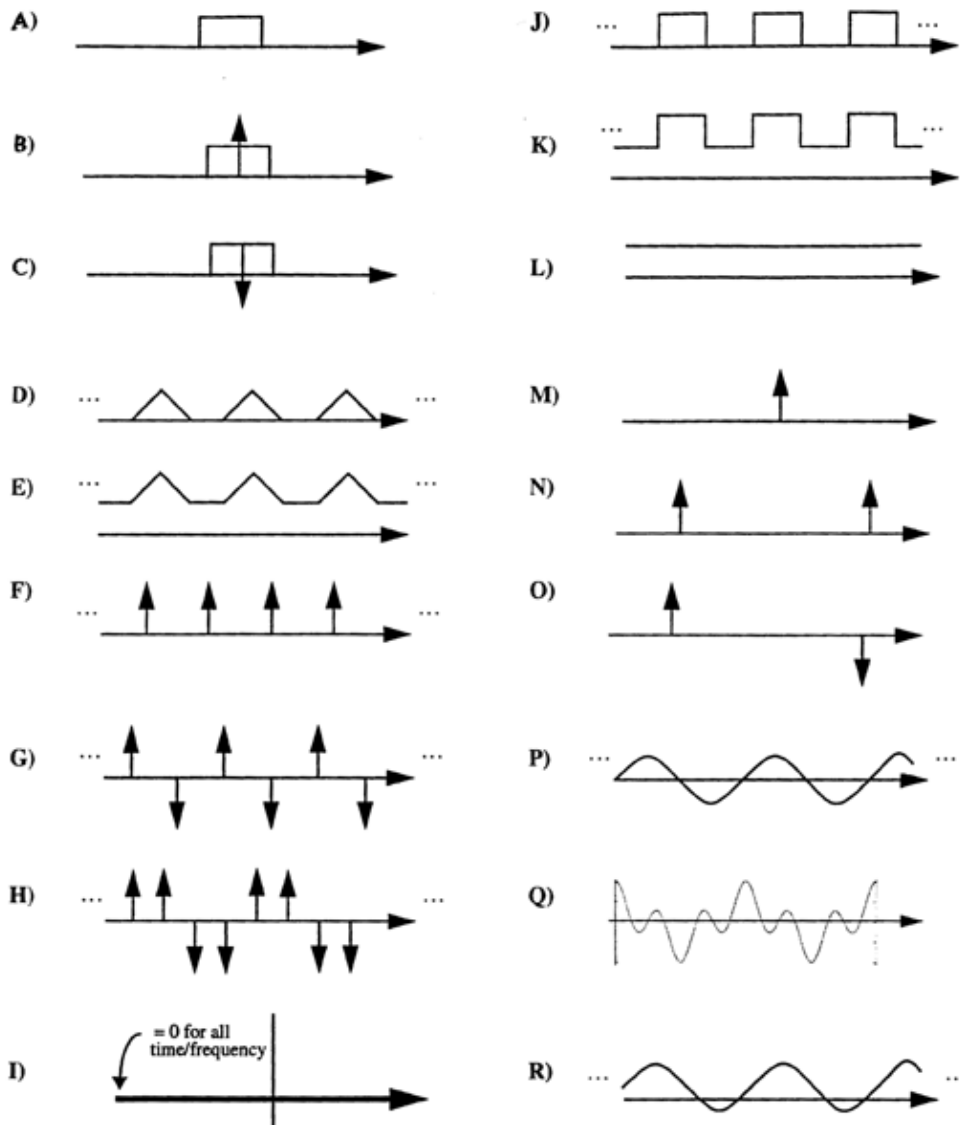
f) An LTI system has impulse response $h(t)$. The step response $h(t)*u(t) =$

The impulse response $h(t)$ is: ___

The sketches on this page can be used as either spectra or time plots.

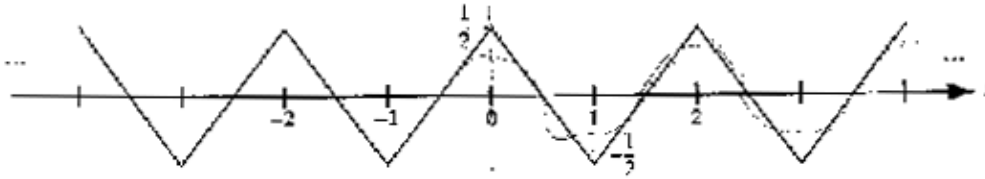
The vertical scale, horizontal scale, and origin in each of the answer sketches are arbitrary, and should be considered independent.

D-K are periodic, and P and Q are periodic



Problem #4 (24 points)

$x(t)$ is a periodic function, as shown:



$x(t)$ can be represented as a Fourier Series $x(t) = \sum(A_k * e^{(j*k*W_0*t)})$, where $W_0 = 2*\pi/2 = \pi$, and $-\infty < k < \infty$

[15 pts] a) Find A_k , (Hint: $\pi(t) \xrightarrow{\text{Fourier Transform}} 2*\sin(W/2)/W$)

[3 pts] b) What is the time average power at the fundamental frequency?

[3 pts] c) What is the time average DC power in $x(t)$?

[3 pts] d) What is the time average power in $x(t)$?

**Posted by HKN (Electrical Engineering and Computer Science Honor Society)
University of California at Berkeley**
If you have any questions about these online exams
please contact examfile@hkn.eecs.berkeley.edu.