

Computer Architecture and Engineering

CS152 Quiz #1

Wed, February 17th, 2016

Professor George Michelogiannakis

Name: _____

This is a closed book, closed notes exam.

80 Minutes. 18 pages

Notes:

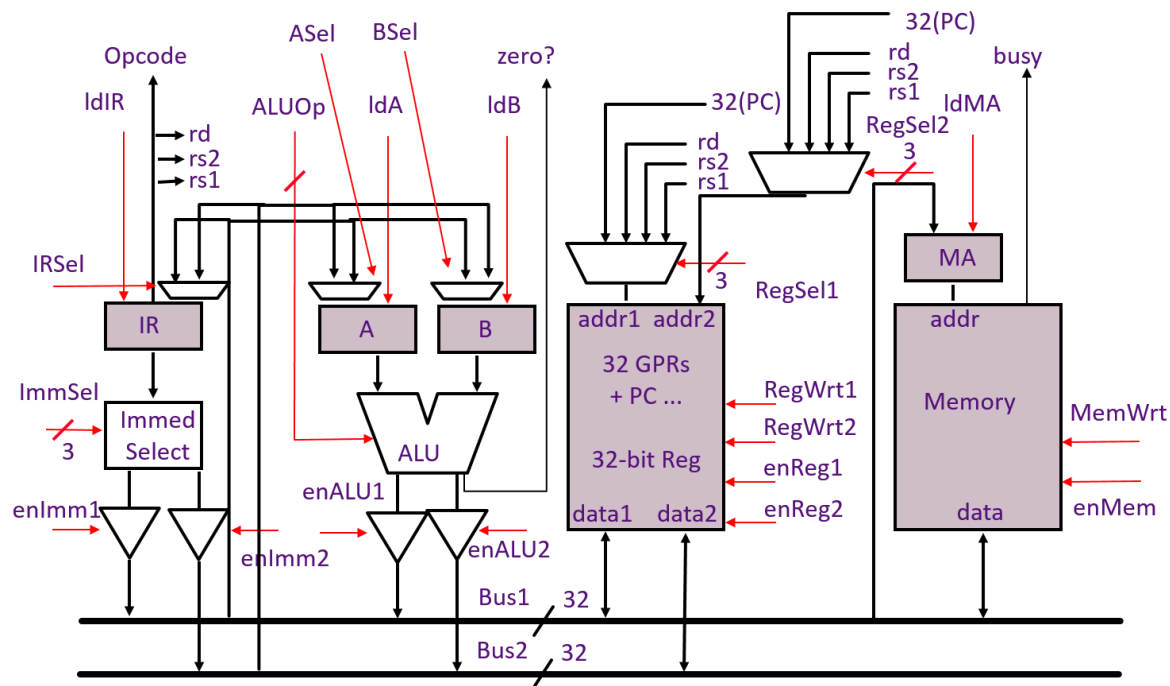
- Not all questions are of equal difficulty, so look over the entire exam and budget your time carefully.
- Please carefully state any assumptions you make.
- Please write your name on every page in the quiz.
- You must not discuss a quiz's contents with other students who have not taken the quiz. If you have inadvertently been exposed to a quiz prior to taking it, you must tell the instructor or TA.
- You will get no credit for selecting multiple-choice answers without giving explanations if the instructions ask you to explain your choice.

Writing name on each sheet	_____	1 Point
Question 1	_____	25 Points
Question 2	_____	30 Points
Question 3	_____	28 Points
Question 4	_____	16 Points
TOTAL	_____	100 Points

Question 1: Microprogramming [25 points]

In this question, we will consider a modification to the bus-based RISC-V architecture, which is shown below. A reference to the original architecture is provided in appendix A.

This new architecture has two buses instead of one. As shown, the immediate select, ALU, and register file all connect to both busses. Also, the inputs to registers A, B, and IR now have muxes with respective control signals (ASel, BSel, IRSel), so they can receive values from either busses. The memory module, however, only connects to bus1 for both data and address. There are two enable signals to control to which bus the immediate select block drives its output: enImm1 and enImm2. Similarly, the ALU has enALU1 and enALU2. The register file has two data inputs and outputs, two write enables and two enables (read enables). Both are independent and can operate at the same time. For instance, if RegWrt1 is asserted and enReg2 is asserted, the register file will write the register on addr1 and read the one on addr2. Reading and writing the same register in the same cycle will return the register's old data. Writing the same register from both ports is not allowed. To facilitate independent addressing, there are separate address inputs (addr1 and addr2) to the register file with separate selects to their respective muxes (RegSel1 and RegSel2).



Q1.A Motivating The Double Bus [3 points]

What impact do you expect the second data bus to have on this architecture's average CPI (clocks per instruction), and why?

Q1.B Implementing a New Instruction [18 points]

For this question, you will implement the microcode for a new instruction in worksheet Q1-1 provided in the next page. The new instruction is a memory-register ALU operation, and has the form:

ALUM rd, rs1, rs2

This instruction reads the memory at the address specified by rs1. It performs the ALU operation between that value and the value of rs2. Then it records the result to rd. In other words, in the example of an addition:

$\text{Reg}[\text{rd}] \leftarrow \text{Mem}[\text{Reg}[\text{rs1}]] + \text{Reg}[\text{rs2}]$

In the worksheet, use don't cares (*) where appropriate. For signals that have two versions, one for each bus (RegSel has RegSel1 and RegSel2, and the same for RegWr, EnReg, enALU, enImm), write which one will be asserted. For example, writing "1" under RegSel means that RegSel1 will be asserted only. Writing "1&2" means both RegSel1 and RegSel2 will be asserted. For multi-bit signals like RegSel, just write the two values. For instance, for RegSel you can write "PC, PC" to select the PC for both. Those signals are shown in red and are underlined.

Your solution should use the fewest cycles possible by exploiting the two busses. In the "μBR" field, N means next state, S means spin, D means dispatch, and J means jump. If you need to add a state please explain clearly. You can assume the memory returns data after a read at the next cycle.

Please comment your code. If your code does not fit in the provided worksheet, you can write in the margins as long as you do so neatly. Your code should exhibit "clean" behavior and not modify any ISA-visible registers (except the PC register and the rd register) in the course of executing the instruction. You will receive credit for elegance and efficiency. Finally, make sure that your microcode sequence fetches the next instruction in program order (i.e., by doing a microbranch to FETCH0 as discussed in the handout).

State	μCode	ldR	Reg Sel	Reg Wr	en Reg	ldA	ldB	ALUOp	en ALU	ld MA	Mem Wr	en Mem	en Imm	ASel	BSel	IRSel	Br	Next State
FETCH0:	MA <- PC; A <- PC	0	PC, *	0,0	1,0	1	*	*	0,0	1	*	0	0,0	Bus1	*	*	N	*
Note1	IR <- Mem PC <- A+4	1	*, PC	0,0	0,0	0	*	INC_A_4	0,1	0	0	1	0,0	*	*	Bus1	D	*
...																		
NOPO (example):	microbranch back to FETCH0	0	*	*	0	*	*	*	0	*	*	0	0				J	FETCH0
ALUM0:																		

Worksheet Q1-1

Note 1: You can assume the memory returns data after a read the next cycle (single-cycle memory).

Q1.C Comparing Microcode ROM Sizes [4 points]

Let us compare the microcode ROM from the original microcoded bus-based RISC-V processor that is shown in Appendix A, and the one for the modified processor we consider in this question. Recall that the microcode ROM contains the necessary states (microinstructions) as well as drives the control signals in worksheet Q1-1.

Compare the height (number of entries) as well as width (bits in each entry) of the microcoded ROM of the modified processor, with the original processor. Does the modified processor require a taller and/or wider ROM? Explain your answer.

Question 2: Branch Prediction and Exceptions [30 points]

For this question, consider a fully bypassed 5-stage RISC-V processor (as shown in Lecture 4, Appendix B, and used in Lab 1). We have reproduced the pipeline diagram in Appendix B (bypasses are not shown). The fetch stage always speculates that the next PC is PC+4.

Remember that branch instructions take as argument source registers and calculate the next PC as an offset from the current (the branch instruction's) PC. For instance, BEQ rs1, rs2, offset is taken if $rs1 == rs2$. In that case, the new PC is $PC + (offset \ll 1)$. Similarly, BNE is taken if $rs1 \neq rs2$, BGE if $rs1 \geq rs2$, and BLT if $rs1 < rs2$. For simplicity in the code segments we see below, we will ignore the left shift by using labels. So branch to "foo" will branch (if taken) to label "foo:" found in the code.

Q2.A Motivating Branch Prediction [10 points]

To understand the pipeline behavior, please fill out the following instruction/time diagram for the following set of instructions until the instruction in 0x4008 (xor) fully executes and commits. Execution starts from 0x2000.

```

    0x2000: add x1, x0, x0      # x1 <= x0 + x0
bar: 0x2004: bne x1, x0, exit
    0x2008: bge x1, x0, foo   # Branch if greater or equal
    0x200c: addi x1, x1, -100
    0x2010: add x5, x5, x5
    0x2014: add x6, x1, x1
    0x2018: sub x1, x1, x2
    ...

foo: 0x4000: addi x1, x1, 1
    0x4004: jal x10, bar     # Jump to bar. x10 <= PC
exit: 0x4008: xor x20, x21, x22

```

PC	Instruction	T1	T2	T3	T4	T5	T6	T7	T8	T9	T10	T11	T12	T13	T14	T15	T16	T17	T18	T19	T20	T21
0x2000	add	F	D	X	M	W																
0x2004	bne		F	D	X	M	W															

Q2.B Adding a BTB [14 points]

Let's assume we have added a slightly modified 4-entry fully associative branch target buffer (BTB) to the Fetch Stage. The BTB is fully searched in the Fetch Stage to see if the PC matches any valid tags. This BTB is slightly modified in that it can contain a valid flag for a PC value but no target branch target (next PC value). In this case the branch is considered taken but with no prediction of target, similar to a branch history table.

In summary, the new BTB checks all entries if the PC of the current instruction is there. If it is:

- It checks the valid bit. If that is 0, no prediction is made (next PC is PC+4).
- If the valid bit is 1, it checks the target PC prediction field. If that field is empty (in real hardware this would be shown by a special value such as all 0s), it predicts the branch as taken but does not predict the new PC.
- If the target predicted PC is non-empty, it predicts that as the next PC.

As a reminder, branch instructions and JAL instructions change the PC relative to the immediate they contain, which is calculated in the decode step. Register operands are used only for condition checking that determines whether the branch is taken, which uses the ALU. Also remember that both branch and jump instructions participate in the BTB.

The Fetch Stage is still predicting PC+4 every cycle, unless either the BTB makes a prediction (has a matching and valid entry for the current PC), or the jump/branch address calculation logic in the Decode and Execute stage corrects for a misprediction (`pc_correct_jal`, `pc_correct_jalr`).

The BTB's valid and target PC fields are updated after the branch or jump instruction's results are known, and only if that instruction fully executes (i.e., not if it is killed).

Show how this pipeline will execute the same code segment shown in Q2.A by filling in the following pipeline diagram with the same termination condition as Q2.A (fully executing the xor instruction).

Initially, the BTB contains:

Tag	Valid	Target PC
0x2004 (bne)	0	0x4008 (exit)
0x2008 (bge)	1	Empty
0x4004 (jal)	1	0x2004 (bar)

Please fill in the BTB's final state below after running the code.

Tag	Valid	Target PC

We have copied over the same code segment shown in Q2.A for your convenience.

```

    0x2000: add x1, x0, x0    # x1 <= x0 + x0
bar: 0x2004: bne x1, x0, exit
    0x2008: bge x1, x0, foo  # Branch if greater or equal
    0x200c: addi x1, x1, -100
    0x2010: add x5, x5, x5
    0x2014: add x6, x1, x1
    0x2018: sub x1, x1, x2
    ...

foo: 0x4000: addi x1, x1, 1
    0x4004: jal x10, bar    # Jump to bar. x10 <= PC
exit: 0x4008: xor x20, x21, x22

```

PC	Instruction	T1	T2	T3	T4	T5	T6	T7	T8	T9	T10	T11	T12	T13	T14	T15	T16	T17	T18	T19	T20	T21
0x2000	add	F	D	X	M	W																
0x2004	bne		F	D	X	M	W															

Q2.C Exceptions [6 points]

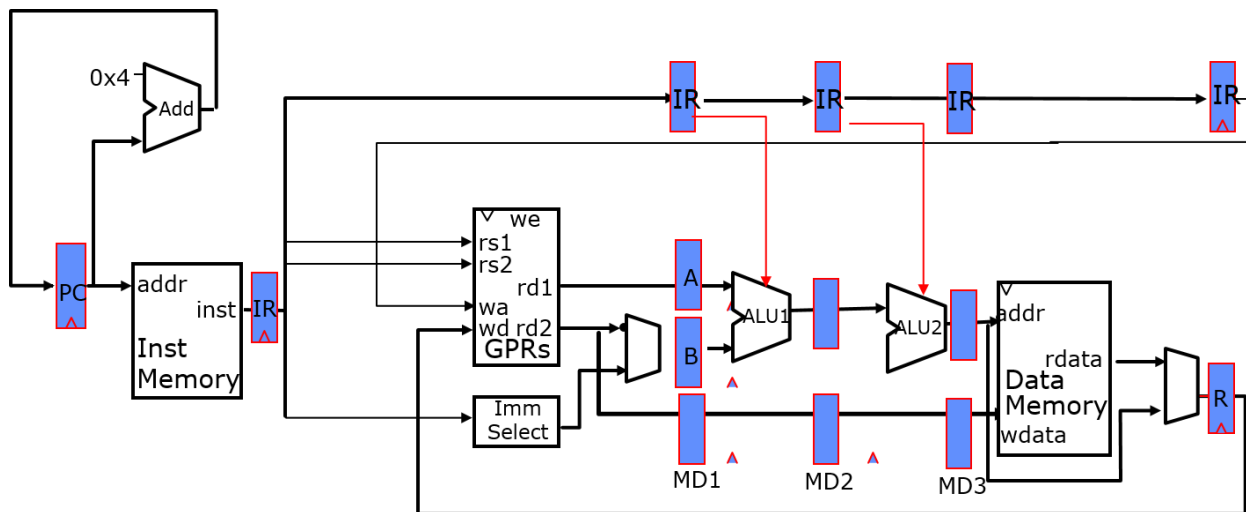
Let's assume that a branch is mispredicted to be non-taken. Thus, the next instruction enters the pipeline before being flushed, and makes it into the decode step. If that instruction has an illegal opcode which would raise an exception, how should the pipeline react? Explain how the pipeline will handle this and why.

Now let's assume that the first time the instruction in PC 0x2008 executes (bge), it raises an exception. If our pipeline provides precise exceptions, what must the value of x1 be by the time the pipeline is flushed and the handler executes?

If we have imprecise exceptions what can the value of x1 be?

Question 3: Floating Points and Data Hazards [28 points]

In the conventional fully bypassed 5-stage pipeline discussed in class, we were able to make the assumption that the ALU is able to complete in one cycle because we assumed integer operations. For this problem, we will assume that the ALU takes **two** cycles to complete. In other words, the ALU is pipelined itself, making the entire pipeline 6 cycles. The ALU only generates a result after 2 cycles (i.e., there is no way to extract any meaningful result after the ALU's first cycle). Memory (instruction and data) still returns data after only one cycle. *You may ignore branch and jump instructions in this problem.*



Appendix B provides a diagram of the original 5-stage pipeline for reference.

Q3.A [11 points] Read After Write Hazard

As a first step, we will examine how this changes data hazards. For this question, we will examine only the ALU-ALU read after write (RAW) hazard where the two instructions are consecutive:

```

ADD x1, x2, x3      # x1 <= x2 + x3
ADD x5, x4, x1      # x5 <= x4 + x1
  
```

Describe how would you resolve this hazard with the minimum number of bubbles (if any) using a combination of data forwarding and stalls (if necessary). You should describe where to add any muxes. Do not consider value speculation for this question. Then fill the following timing diagram to illustrate how the pipeline will behave, and show where data forwarding happens, if at all, by drawing an arrow between the two stages that participate in it.

Instruction / cycle	T0	T1	T2	T3	T4	T5	T6	T7	T8	T9
ADD x1, x2, x3										
ADD x5, x4, x1										

Q3.B [13 points] ALU Value Speculation

Now let's assume that we can extract the result of the ALU operation after the first cycle with a variable confidence ($X\%$). In other words, if we read the output of the first ALU pipeline stage, it will be correct (what the second stage will output one cycle later) $X\%$ of the time.

Initially, describe how value speculation can be used to resolve this hazard. Then discuss what the penalty is in the case of mis-speculation (speculative the wrong value), and fill in the following time diagram showing how the pipeline will behave. Given the penalty in number of cycles that you calculated, what is the lowest value of X needed to be to make value speculation reduce the CPI.

Instruction / cycle	T0	T1	T2	T3	T4	T5	T6	T7	T8	T9
ADD x1, x2, x3										
ADD x5, x4, x1										

Q3.C [4 points] Merging Pipeline Stages

Instead of pipelining the ALU, you have the option of leaving the ALU in a single pipeline step, and instead merge the fetch and decode stages, as well as memory and writeback stages. This will result in a 3-stage pipeline. Do you expect this 3-stage pipeline to have a lower, higher, or equal CPI and why?

Question 4: Iron Law of Processor Performance [16 points]

Mark whether the following modifications will cause each of the three categories to **increase**, **decrease**, or whether the modification will have **no effect**. *Explain your reasoning* to receive credit.

Assume the initial machine is pipelined. Also assume that any modification is done in a way that preserves correctness and maintains efficiency, but that the rest of the machine remains unchanged.

		Instructions/Program	Cycles/Instruction	Circuit complexity
A	Replace the two operand ALU with a three operand one and add three-operand register-register instructions to the ISA (e.g. ADD rs1, rs2, rs3, rd).			
B	Use the same ALU for instructions and for incrementing the PC by 4.			

		Instructions/Program	Cycles/Instruction	Circuit complexity
C	Remove jump instructions (e.g., JAL) and use branch instructions instead.			
D	Increase the number of user registers from 32 to 64			

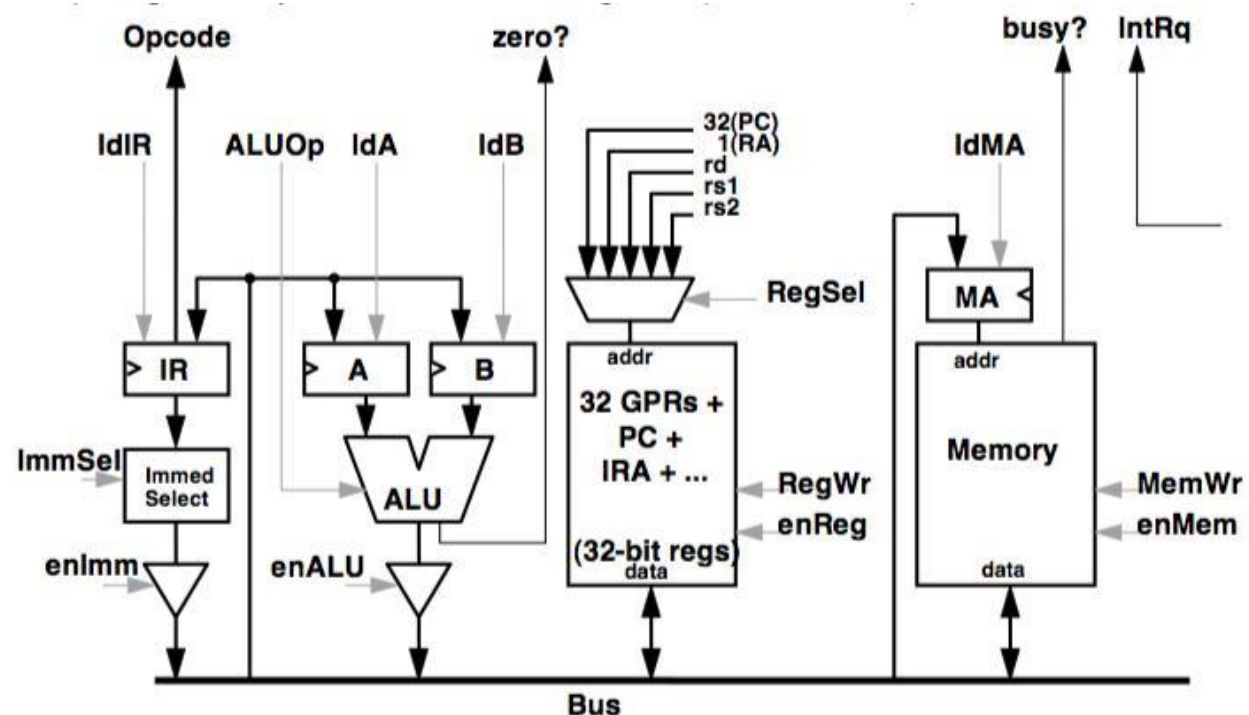
Appendix A. A Cheat Sheet for the Bus-based RISC-V Implementation

Remember that you can use the following ALU operations:

ALUOp	ALU Result Output
COPY_A	A
COPY_B	B
INC_A_1	A+1
DEC_A_1	A-1
INC_A_4	A+4
DEC_A_4	A-4
ADD	A+B
SUB	A-B
SLT	Signed(A) < Signed(B)
SLTU	A < B

Table A1: Available ALU operations

Also remember that !Br (*microbranch*) represents a 3-bit field with six possible values: N, J, EZ, NZ, D, and S. If !Br is N (next), then the next state is simply (*current state* + 1). If it is J (jump), then the next state is *unconditionally* the state specified in the Next State column. If it is EZ (branch-if-equal-zero), then the next state depends on the value of the ALU's *zero* output signal. If *zero* is asserted ($== 1$), then the next state is that specified in the Next State column, otherwise, it is (*current state* + 1). NZ (branch-if-not-zero) behaves exactly like EZ, but instead performs a microbranch if *zero* is not asserted ($\neq 1$). If !Br is D (dispatch), then the FSM looks at the opcode and function fields in the IR and goes into the corresponding state. If S, the !PC spins if *busy?* is asserted, otherwise goes to (*current state* + 1).



Appendix B. A Diagram of the Original 5-Stage Pipeline

(shown without bypasses)

